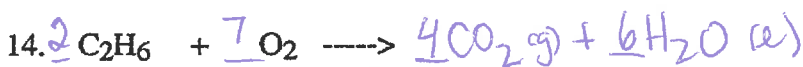
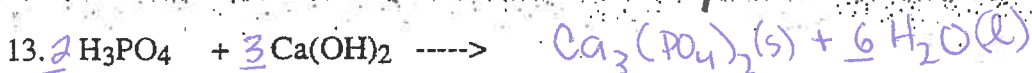
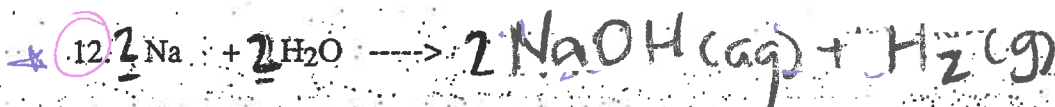
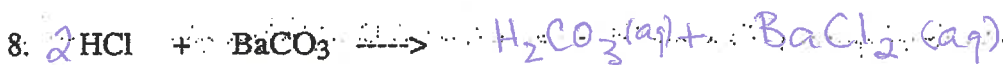
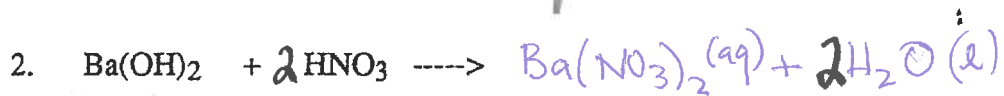
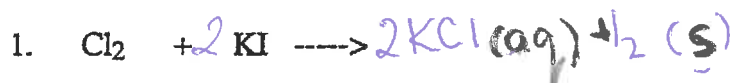


Complete and balance the following equations:



PREDICTING PRODUCTS OF CHEMICAL REACTIONS

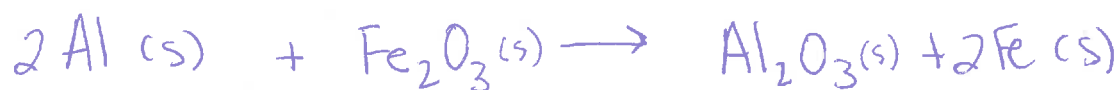
Name Key

Predict the products of the reactions below. Then, write the balanced equation and classify the reaction.

1. magnesium bromide + chlorine



2. aluminum + iron (III) oxide



3. silver nitrate + zinc chloride



4. hydrogen peroxide (catalyzed by manganese dioxide)



5. zinc + hydrochloric acid



6. sulfuric acid + sodium hydroxide



7. sodium + hydrogen



8. acetic acid + copper

