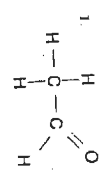


Name \_\_\_\_\_  
 Class \_\_\_\_\_  
 Date \_\_\_\_\_

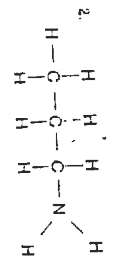
# Organic Chemistry

## A. Classifying Organic Compounds

Organic substances can be classified into a number of different groups, depending on their structures. Classify each of the following substances as either an alkane, alkene, alkyne, aromatic, alcohol, aldehyde, ketone, ether, organic acid, ester, amine, or amide.



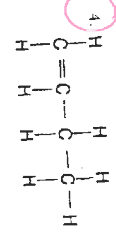
aldehyde



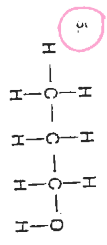
amine



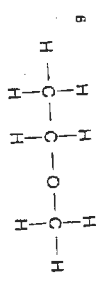
benzene



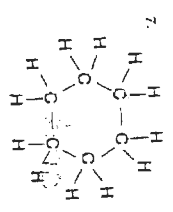
butene



propanol

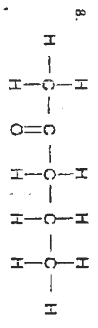


ether

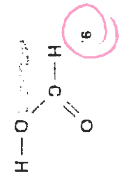


omit

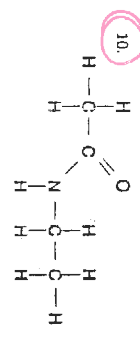
# CHAPTER 23 WORKSHEET



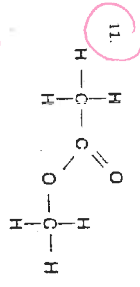
ketone



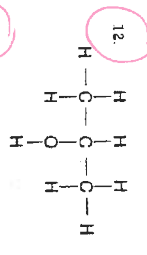
methanoic acid



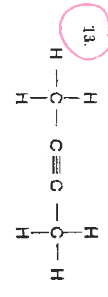
omit



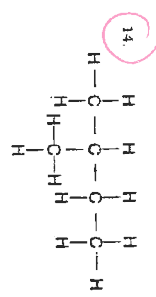
methyl ethanoate



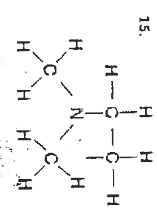
2-propanol



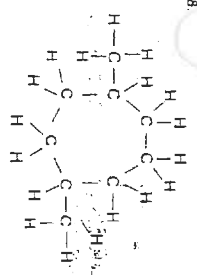
2-butyne



2-methyl-butane



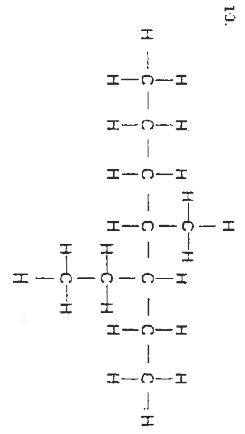
omit



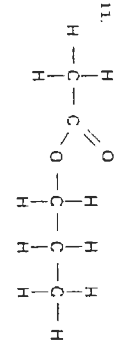
ether



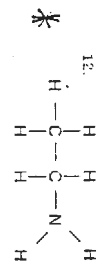
ether



3-ethyl-4-methylheptane



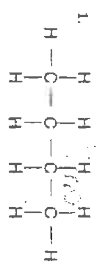
propyl ethanoate



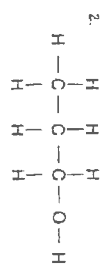
amine

B. Naming Organic Compounds

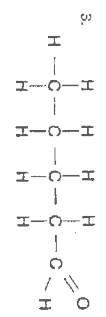
In naming organic substances, a set of rules formulated by IUPAC is usually followed. Use the IUPAC rules to name each of the following. OR SIMPLY IDENTIFY THE FUNCTIONAL GROUP FOR THE \* COMPOUND



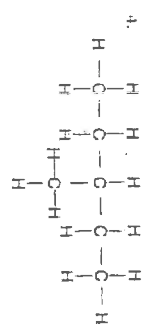
butane



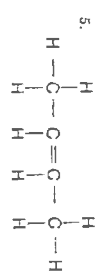
1-propanol



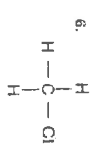
aldehyde



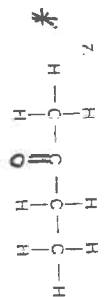
3-methyl-pentane



2-butene



chlor-methane



ketone

Copyright © by D.C. Heath and Company

Copyright © by D.C. Heath and Company

### C Drawing Structural Formulas

Precise usage of the IUPAC naming system permits those familiar with the system to draw correct structural formulas of compounds, given the names of the compounds. Draw structural formulas for each of the following.

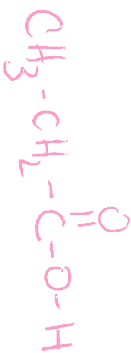
1. propane



2. 2-methylpropane



3. propanoic acid



4. methyl butanoate



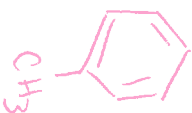
5. 2,3-dimethylhexane



6. butanal



7. methylbenzene



8. ethene



9. propyne



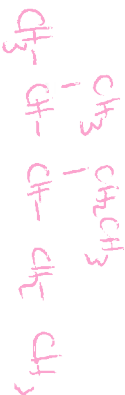
10. 2-methylpropene



11. 1,4-dichlorobenzene



12. 3-ethyl-2-methylpentane



13. 2-butanol



14. methyl propanoate



### D Writing Equations for Organic Reactions

Organic compounds can undergo many kinds of reactions. Write balanced equations for each of the reactions below.

1. Addition reaction between propene and hydrogen fluoride

2. Substitution reaction between methane and chlorine

3. Combustion of ethane by oxygen

4. Esterification reaction between methanoic acid and methanol

5. Formation of an amide by methanoic acid and methylamine



